

Name \_\_\_\_\_ Date \_\_\_\_\_

## THE HEALTHY IMMUNE SYSTEM

DIRECTIONS: Fill in the blanks using the words below to explain how the healthy immune system functions.

VIRUS  
NORMAL  
T-CELLS  
CHEMICALLY

BACTERIA  
ANTIBIOTICS  
B-CELLS  
PROTOZOAN

ILLNESS  
MULTIPLIES  
WHITE BLOOD CELLS  
FUNGI


ANTIBODIES  
IMMUNE

1. A germ ( \_\_\_\_\_ , \_\_\_\_\_ , \_\_\_\_\_ , \_\_\_\_\_ , etc.) invades the body and quickly \_\_\_\_\_ .



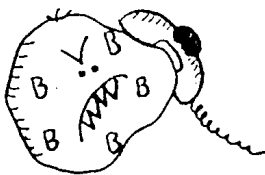


2. The healthy \_\_\_\_\_ system fights back by sending \_\_\_\_\_ to destroy the invaders.

3. First, the \_\_\_\_\_ surround and "eat" some of the invaders, then \_\_\_\_\_ notify the



4. \_\_\_\_\_ which, in turn, produce



5. \_\_\_\_\_ which destroy the germs.

6. Germs that survive the attack can cause \_\_\_\_\_ .



7. \_\_\_\_\_ help to finally destroy all the germs.

8. \_\_\_\_\_ health is restored.

